

## Year 4 Mathematics Homework Task

### Addition and Subtraction

Tick your answer to each question, like in the example below. You can use any space left below or around a question for your working out, if you need it.

Example Question

$$1,435 + 2,870 =$$

- a ☐ 3,205
  - b ☒ 4,305
  - c ☐ 3,295
  - d ☐ 5,110
- 

- 1 Find the difference between 4,341 and 2,000.

- a ☐ 2,341
- b ☐ 4,141
- c ☐ 2,000
- d ☐ 6,341

2  $4,326 - 714 =$

- a ☐ 3,612
  - b ☐ 2,714
  - c ☐ 4,412
  - d ☐ 4,612
- 

- 3 At a football match, 3,468 people were supporting the blue team and 4,145 people were supporting the red team.  
How many supporters were there altogether?

- a ☐ 7,613
  - b ☐ 7,603
  - c ☐ 7,503
  - d ☐ 7,612
- 

4  $8,354 - 5,687 =$

- a ☐ 2,687
- b ☐ 2,667
- c ☐ 3,667
- d ☐ 14,041

- 5 Four children have been asked to estimate the answer to this calculation.  
 $5,527 + 3,266 =$

Who has correctly estimated the answer to the calculation?

- a ☐ Amy says, "If I round both numbers to the nearest 1,000, the answer would be 8,000."
- b ☐ Beth says, "If I round both numbers to the nearest 10, the answer would be 8,780."
- c ☐ Carl says, "The answer is 8,793."
- d ☐ Darren says, "If I round both numbers to the nearest 100, the answer would be 8,800."



- 6  $4,659 - 2,130 =$

- a ☐ 6,789
- b ☐ 4,446
- c ☐ 2,529
- d ☐ 6,780

- 7  $3,947 + 400 =$

- a ☐ 4,447
- b ☐ 7,947
- c ☐ 4,347
- d ☐ 3,951


- 8 Find the missing numbers to make this equation correct

	5	3	6	5
+	1		3	7
	7	2		2



a ☐

	5	3	6	5
+	1		3	7
	7	2		2



b ☐

	5	3	6	5
+	1		3	7
	7	2		2

c ☐

	5	3	6	5
+	1		3	7
	7	2		2

d ☐

	5	3	6	5
+	1		3	7
	7	2		2

- 9 A farmer had 3,512 chickens.

He bought 2,463 more chickens

How many chickens does the farmer have now?

- a ☐ 5,965
- b ☐ 1,049
- c ☐ 5,975
- d ☐ 5,875

- 10 One car costs £4,017.  
Another car costs £3,620.  
Find the total cost of the two cars.

a ☐ £7,637  
b ☐ £1,617  
c ☐ £7,037  
d ☐ £4,379

---

- 11  $6,318 + 3,106 =$

a ☐ 9,414  
b ☐ 9,422  
c ☐ 3,212  
d ☐ 9,424

---

- 12 Which calculation cannot be used to check the following calculation?  
 $4,108 + 3,214 = 7,322$

a ☐  $3,214 + 4,108$   
b ☐  $7,322 - 4,108$   
c ☐  $4,108 - 3,214$   
d ☐  $7,322 - 3,214$

---

- 13  $5,247 - 3,042 =$

a ☐ 2,209  
b ☐ 2,205  
c ☐ 2,005  
d ☐ 2,215

---

- 14 Ali had £7,362.  
He spent £3,158.  
How much money did Ali have left?

a ☐ £4,206  
b ☐ £4,214  
c ☐ £4,204  
d ☐ £10,520

---

- 15 Marva has 2,145 stamps in her collection. Avisha has 1,326 more stamps than Marva in her collection.  
How many stamps do they have in total?

a ☐ 5,696  
b ☐ 4,797  
c ☐ 3,471  
d ☐ 5,616

- 16 Hamza used 5,321 bricks to build a house. He used 2,423 bricks to build a garage.  
How many more bricks did he use to build the house than the garage?

a ☐ 2,898  
b ☐ 3,102  
c ☐ 7,744  
d ☐ 1,172

- 17 ..... + 3,596 = 5,824

a ☐ 2,228  
b ☐ 9,420  
c ☐ 2,226  
d ☐ 2,372



- 18 Which calculation below can be used to estimate the answer to  $9,249 - 4,813$ ?

a ☐  $9,000 - 4,000$   
b ☐  $9,000 - 5,000$   
c ☐  $9,300 - 4,900$   
d ☐  $9,049 - 4,013$



- 19 2,370 people live on one street.  
1,548 people live on another street.  
How many people are there in total living on the two streets?

a ☐ 3,818  
b ☐ 3,928  
c ☐ 3,819  
d ☐ 3,918

- 20 Find the missing numbers to make this equation correct:

	8	1		3
-	5	1	2	7
	3		3	6


a ☐

	8	1		3
-	5	1	2	7
	3		3	6

b ☐

	8	1		3
-	5	1	2	7
	3		3	6

c ☐

	8	1		3
-	5	1	2	7
	3		3	6

d ☐

	8	1		3
-	5	1	2	7
	3		3	6