

Year 3 Mathematics Homework Task

Addition and Subtraction

Tick your answer to each question, like in the example below. You can use any space left below or around a question for your working out, if you need it.

Example Question



$$435 + 376$$

- a ☐ 701
- b ☒ 811
- c ☐ 821
- d ☐ 141



- 1 There are 127 girls and 60 boys in the playground.
How many pupils are there altogether?

- a ☐ 727
- b ☐ 12,760
- c ☐ 67
- d ☐ 187



- 2 Find the missing numbers to make this equation correct:

	1	5	
+	3	2	6
<hr/>			
	4		3

a ☐

	1	5	
+	3	2	6
<hr/>			
	4		3

b ☐

	1	5	
+	3	2	6
<hr/>			
	4		3

c ☐

	1	5	
+	3	2	6
<hr/>			
	4		3

d ☐

	1	5	
+	3	2	6
<hr/>			
	4		3

- 3 $380 + 70 =$

- a ☐ 387
- b ☐ 450
- c ☐ 400
- d ☐ 460

- 4 Sophie has 529 pebbles in her collection. Julie has 236 fewer pebbles. How many pebbles does Julie have?

- a ☐ 393
b ☐ 293
c ☐ 765
d ☐ 313
-

5 $342 + 521 =$

- a ☐ 862
b ☐ 863
c ☐ 873
d ☐ 763
-



6 $293 - 5 =$

- a ☐ 243
b ☐ 292
c ☐ 298
d ☐ 288



7 $426 - 30 =$

- a ☐ 396
b ☐ 423
c ☐ 416
d ☐ 456
-



- 8 Find the missing numbers to make this equation correct:

	8		6
-	2	3	4
<hr/>			
		2	2



a ☐

	8		6
-	2	3	4
<hr/>			
		2	2



b ☐

	8		6
-	2	3	4
<hr/>			
		2	2

c ☐

	8		6
-	2	3	4
<hr/>			
		2	2

d ☐

	8		6
-	2	3	4
<hr/>			
		2	2

- 9 Robert made two numbers using these digit cards: 3 6 9 4
He then added the two numbers.
Which two numbers will make the largest total?

- a ☐ 943 + 6
 - b ☐ 643 + 9
 - c ☐ 936 + 4
 - d ☐ 964 + 3
-

- 10 Find the sum of 83 and 561.

- a ☐ 644
 - b ☐ 544
 - c ☐ 643
 - d ☐ 5144
-

- 11 $683 - 246 =$

- a ☐ 434
- b ☐ 443
- c ☐ 447
- d ☐ 437

- 12 Subtract 83 from 966.

- a ☐ 923
 - b ☐ 883
 - c ☐ 823
 - d ☐ 136
-

- 13 $282 + 657 =$

- a ☐ 839
 - b ☐ 929
 - c ☐ 8139
 - d ☐ 939
-

- 14 There were 789 children in the playground. 500 went into the hall for assembly.
How many were left in the playground?

- a ☐ 784
- b ☐ 739
- c ☐ 289
- d ☐ 1,289