

Year 3 Mathematics Homework - Place Value

Questions

Name:

Date:

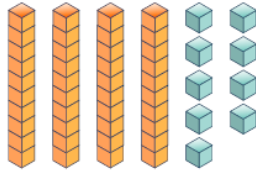
Tick your answer to each question, like in the example below. You can use any space left below or around a question for your working out, if you need it.

Example Question

$435 + 376$

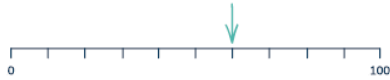
- a 701
- b 811
- c 821
- d 141

1 Which number is represented by the Base 10?



- a 13
- b 409
- c 94
- d 49

4 Which number is the arrow pointing to?



- a 60
- b 6
- c 70
- d 50

5 There are 100 marbles in each jar.

If there are 7 jars of marbles, how many marbles are there in total?

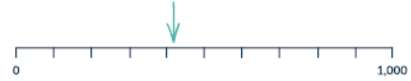
- a 107
- b 700
- c 100
- d 70

6 Complete the sentence.

..... has 3 tens and 5 ones.

- a 305
- b 35
- c 53
- d 8

2 Estimate the number the arrow is pointing to.



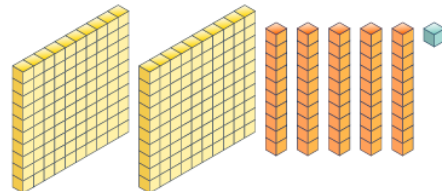
- a 410
- b 400
- c 450
- d 390

3 What is the missing number?



- a 9
- b 900
- c 90
- d 100

7 Which number is represented by the Base 10?



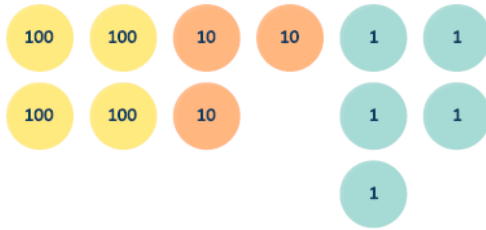
- a 250
- b 251
- c 200501
- d 260

8 Which school has fewer than 550 children in it?

Tulip School	555 children
Forest School	505 children
Primrose School	600 children
Daisy School	550 children

- a Tulip School
- b Forest School
- c Primrose School
- d Daisy School

9 Which number is represented by the counters?

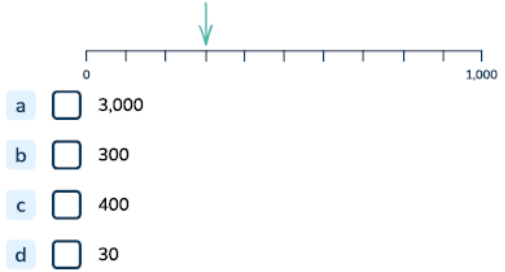


- a 400305
- b 435
- c 12
- d 705

10 What is 100 less than 705?

- a 805
- b 695
- c 605
- d 705

11 Which number is the arrow pointing to?



- a 3,000
- b 300
- c 400
- d 30

12 Order the money from greatest to smallest.

- 80p, 46p, 92p
- a 46p, 92p, 80p
 - b 92p, 80p, 46p
 - c 46p, 80p, 92p
 - d 92p, 46p, 80p

13 What is 10 more than 592?

- a 582
- b 602
- c 612
- d 692

14 Complete the number sentence.

$$362 = 200 + \dots + 2$$

- a 60
- b 360
- c 100
- d 160

15 Which number in this sequence is wrong?

450, 400, 350, 300, 205, 200

- a 450
- b 350
- c 205
- d 300